

PM SHRI KENDRIYA VIDYALAYA NO.2 AFS, KALAIKUNDA
WINTER VACATION HOLIDAY HOMEWORK
PRIMARY SECTION 2023-24

CLASS: III A,B,C

ENGLISH

Q.1. Underline the verb in the following sentences-

1. The toy is broken.
2. She is running.
3. I am doing my work.
4. It was snowing heavily.
5. Tim is throwing a ball.
6. They bought a new car.
7. The cat ran across the road.
8. The ants crawled along the path.
9. She sat on the bed.
10. She read her books for five years.

Q.2. List these animal under **Domestic animals** and **wild animals**.

Jackal	fox	tiger	dog	
cow				
Elephant	bear	sheep	goat	buffalo

Q.3. Complete the sentences.

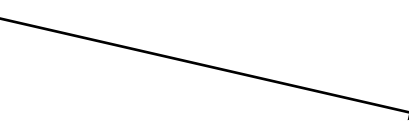
1. Give me some _____ to eat. (food/clothes)
2. Play with _____ . (me/grey)
3. Swim across _____ . (the river/the boat)
4. Let's get on the _____ . (train/dawn)

Q.4. Complete the columns.

One	Many
Carrot	Carrots
Turnip	
Onion	
Potato	potatoes
Tomato	

Q.5. Match the opposites. One has been done for you.

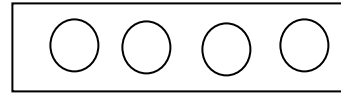
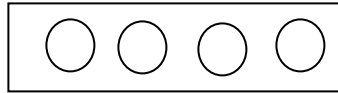
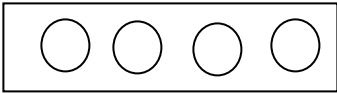
Downward	weak
Slowly	night
Little	upward
Slender	fast



MATHS

Q.1 Write table 1 to 15

Q.2 See the picture and write how many times comes?



_____ times come _____ circles.

Q.3 Write how many ?

a) 1 Kilogram = _____ grams.

b) 1 mt. = _____ c.m.

c) 1 lt. = _____ ml.

d) 1 year = _____ months.

e) January has _____ days.

Q.4 Complete the following number pattern.

a) 10 A, 11 B, 12 C, _____, _____, _____.

b) 12, 22, 32, _____, _____, _____

Q. 5. Fill in the blanks:

a) 5 added 6 times = _____.

b) _____ times comes 7 = 21

Q.6 Multiply:

a) 9 X 4 = _____

b) 8 X _____ = 32

Q.7 Convert the following.

a) 6000 g = _____ kg.

b) 500 cm = _____ mt.

c) 9000 ml = _____ lt.

d) 5 kg 200 g. = _____ grams.

Q.8 Find out the secret message.

a) 1 H 2 A 3 P 4 P 5 Y 6 N 7 E 8 W 9 Y 10 E 11 A 12 R

b) 1 I 1 L 2 O 3 V 4 E 5 M C Y 7 I 8 N 9 D 10 I 11 A

Q.9. Add:

3 0 4

+9 9 1

9 7 3

+2 0 8

8 0 9

+0 1 1

Q.10. Subtract:

9 8 3

-5 0 7

7 0 0

-2 9 3

9 1 1

-6 1 1

CLASS: IV A,B,C

ENGLISH

1. Revise unit 6 and 7 for your PT2 Exam
2. Read next unit 8- A watering rhyme.
3. Write an application to the principal for sick leave an urgent piece of work.
4. Write a paragraph on 'Grand Parents Day' Celebrated on your school.
5. Write your own poem on "NEW YEAR" And make a Colorful Greeting Card for any of your favorite teachers or attach it in your file.
6. **PROJECT-** read any story book and make a book report for the book you read. It should include the following :
 - a) Book cover (draw an important scene)
 - b) Title of the book
 - c) Name of the author
 - d) Your favourite character from the story
 - e) The reason why you liked the book
7. Pick out 20 action words from your text book and write them with sentence

NOTE: ALL WRITTEN WORK IS TO BE DONE IN FILE

HINDI

सभी बच्चे लेख पर ध्यान देंगे |

1. पढक्कू कविता को याद करके अपने शब्दों में कहानी के रूप में लिखिए।
2. 5 पेज सुलेख लिखे |
3. रचनात्मक कार्य :
 1. घर में चुपके से आ जाने वाले शरारती जीवों के बारे में 10 वाक्य लिखिए।
 2. अपनी मनपसंद खाने-पीने की चीजों के चित्र A4 sheet पर बनाइये। (कम से कम 10)
 3. सभी अपूर्ण कार्य पूर्ण करे |

नोट: सभी गृहकार्य holiday homework नोट बुक में करें।

EVS

1. ANSWER THE FOLLOWING QUESTIONS.
 - Q1. Why did Abdul's hand become red by the effort ?
 - Q2. How do different parts of the plant get water ?
 - Q3. What are weeds ?
 - Q4. Why was Raziya worried when she read the newspaper?
 - Q5. Why did Nandita came to Mumbai ?
2. Write the name of some fruits and vegetables that
 - a. Spoil Early
 - b. Stay for some days
 - c. Smooth skin
 - d. Rough skin
3. True and False
 - a. Basava's father is a truck -driver. _____
 - b. Babuji prepares the handcraft and leaves for the bazaar at 7'o clock. _____
 - c. Desert oak is found in Australia. _____
 - d. Polluted water improves our health. _____

- e. Big Film stars live in choupati. _____
4. Fill in the blanks
- _____ plants grow from a crack in a wall.
 - Baswa lives in Belvanka village in _____.
 - Nandita came to Mumbai for her _____.
 - A _____ is there against cutting trees.
 - _____ grow along with the onion plants.
5. Think and write
- National bird of India.
 - A bird that cannot fly.
 - The bird which lays the biggest egg.
 - The bird which sleeps during the day and wakes at night.
6. Write any 5 uses of water.
7. Draw or paste the banyan tree.
8. Write 5 ways, how will you help your family.
9. Match the following
- | | |
|------------------|----------------------------------|
| a.) Dove | in or around our house . |
| b.) Indian Robin | Old buildings. |
| c.) Crow | hangs from branch of a tree. |
| d.) Sparrow | Courtyard, thorns, mehndi hedge. |
| e.) Pigeon | hole in a tree trunk. |
| f.) Coppersmith | between the stones. |
| g.) Sunbird | high up on a tree. |

MATHS

- Learn and write multiplication tables from 10 to 20.
 - Practice all the work done in the class up to December (chapter 8 to 11) for periodic test 2.
 - Make multiplication table of 12 by using table of 5 and 7 on A4 sheet.
- $\frac{1}{4}$ Kg of sugar= gm
 - $\frac{1}{5}$ Kg of rice= gm
 - 1 kg of wheat= gm
 - $\frac{1}{2}$ Kg of pulse= gm
- Draw a Rangoli using different shapes and symmetrical patterns (on colourful sheet)

CLASS: V A,B,C

ENGLISH

Make a colourful folder and keep all the Assignment sheets in it.

- Practice cursive hand writing, one page daily.
- Write three new words daily and find out their meanings from the dictionary.
- Write 10 pairs of similar sounding word (Example- two ,too)
- Revise all the work done in notebook and book.
- Do reading of the following chapters -
Talkative Barber, Topsy-turvy land, Nobody's friend and Gulliver's Travels.

Thank you

HINDI

सभी बच्चे लेख पर ध्यान देंगे ।

१. आवधिक परीक्षण २ (PT 2) के लिए घर पर पुनरावृत्ति कीजिए।

२. 5 पेज सुलेख लिखे ।

३. रचनात्मक कार्य :

क).नदी पर लघु कथा (short story) लिखिए शब्दों का प्रयोग कीजिए जैसे नदी , नाव, मछली, स्वच्छ आदि

ख)अखबार में से जल से संबंधित अनुच्छेदों को काटकर कॉपी में चिपकाए।

ग). भारत प्रदेश में बहने वाली प्रमुख नदियों के नाम लिखिए एवं चित्र चिपकाए।

३. सभी अपूर्ण कार्य पूर्ण करे ।

नोट: सभी गृहकार्य नोट बुक में करें।

EVS

Q1) Draw or paste the pictures of the types of houses found in Jammu & Kashmir.

Describe about them.

Q2) Describe about any two massive earthquakes that have happened recently. Paste the picture of them. What precautions should we take to protect ourselves from such natural calamities?

Q3) Write about the five oil refineries of India. Where are they situated? Label them in the Political map of India. Write about them.

Q4) Collect and paste pictures of five different musical instruments which make sound by blowing air into them.

Q5) Paste the pictures of any 5 famous female players. and also mention their achievements.

MATHS

1) Measure the area and boundary of your TV screen.

2) Learn and write 2 to20 multiplication tables.

3) Draw any two irregular shapes on graph paper and measure boundaries using a thread.

4) Paste the MRP. slip of Item you buy and find the price of 5 such Items.

5) Find out the difference between maximum and minimum temperature for days between 28 December to 31 December of the winter vacation.